

Please write clearly in block capitals.

Centre number

Candidate number

Surname _____

Forename(s) _____

Candidate signature _____

GCSE MATHEMATICS

H

Higher Tier Paper 3 Calculator

Tuesday 11 June 2019


Morning

Time allowed: 1 hour 30 minutes

Materials

For this paper you must have:

- a calculator
- mathematical instruments.



Instructions

- Use black ink or black ball-point pen. Draw diagrams in pencil.
- Fill in the boxes at the top of this page.
- Answer **all** questions.
- You must answer the questions in the spaces provided. Do not write outside the box around each page or on blank pages.
- Do all rough work in this book. Cross through any work you do not want to be marked.

Information

- The marks for questions are shown in brackets.
- The maximum mark for this paper is 80.
- You may ask for more answer paper, graph paper and tracing paper. These must be tagged securely to this answer book.

For Examiner's Use	
Pages	Mark
2–3	
4–5	
6–7	
8–9	
10–11	
12–13	
14–15	
16–17	
18–19	
20–21	
22–23	
24–25	
26–27	
TOTAL	

Advice

In all calculations, show clearly how you work out your answer.



Answer **all** questions in the spaces provided

Do not write
outside the
box

- 1** Work out £1.50 as a fraction of 60p
Circle your answer.

[1 mark]

$$\frac{2}{5}$$

$$\frac{1}{4}$$

$$\frac{4}{1}$$

$$\frac{5}{2}$$

- 2** For a biased dice, $P(6) = \frac{3}{5}$
Circle the probability of two sixes when the dice is rolled twice.

[1 mark]

$$\frac{6}{25}$$

$$\frac{6}{10}$$

$$\frac{9}{25}$$

$$\frac{9}{5}$$

- 3** Circle the lowest common multiple (LCM) of 5, 15 and 25

[1 mark]

5

45

75

150



- 4 Circle the **two** roots of $(x - 5)(x + 3) = 0$

[1 mark]

-5

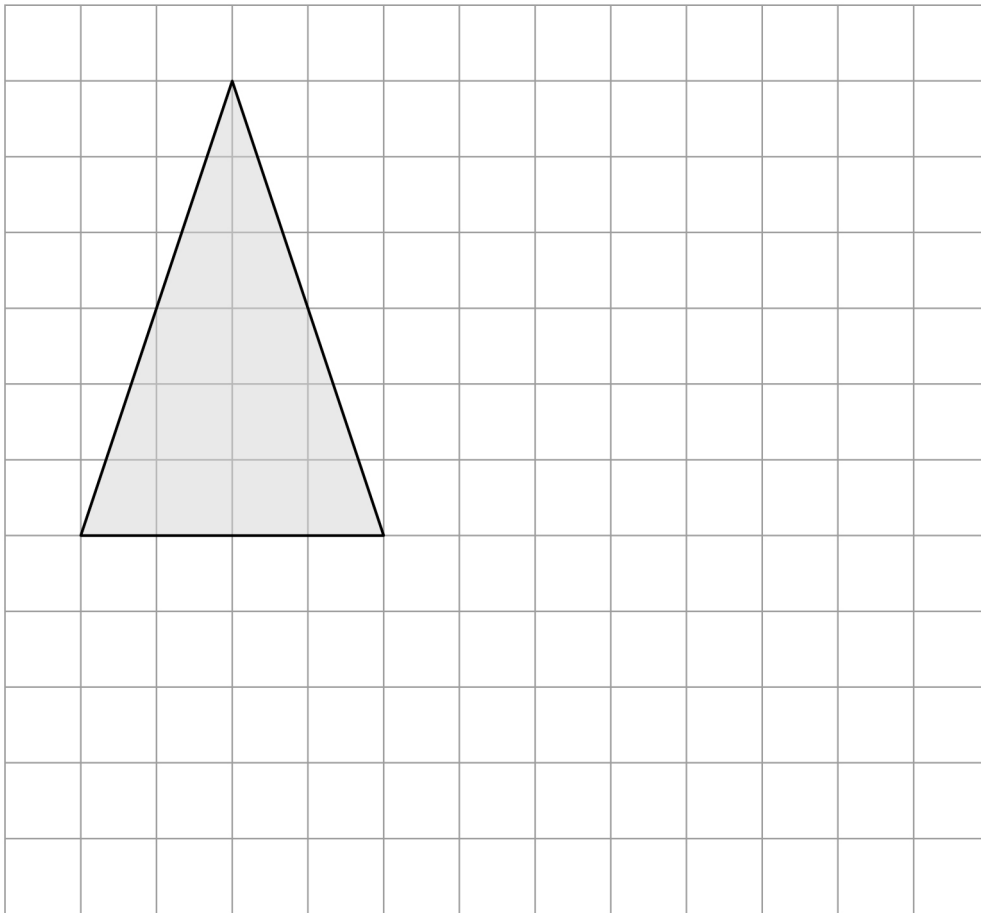
-3

3

5

- 5 On the grid, draw an enlargement of the triangle with scale factor $\frac{1}{2}$

[2 marks]



6

To the nearest pound, Jon has £9

To the nearest 50p, Ellie has £6.50

Work out the maximum possible total amount of money.

[3 marks]

Answer £ _____



7 Two solids, J and K, have the same density.

Complete the table.

Include units in your answers.

[3 marks]

	J	K
Mass	48 g	78 g
Volume	8 cm ³	
Density		

8 Rearrange $y = 3x - 2$ to make x the subject.

Circle your answer.

[1 mark]

$$x = \frac{y}{3} - 2$$

$$x = \frac{y+2}{3}$$

$$x = \frac{y-2}{3}$$

$$x = \frac{y}{3} + 2$$

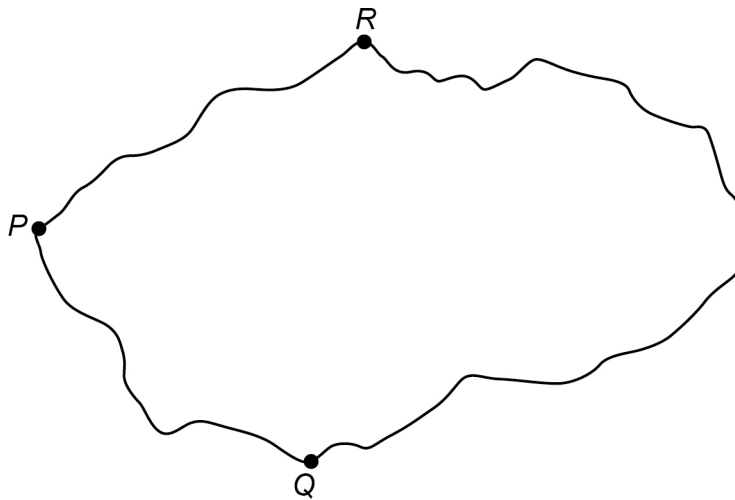


9 Towns P , Q and R are connected by roads PQ , PR and QR .

PR is 10 km longer than PQ .

QR is twice as long as PR .

The total length of the three roads is 170 km



Not drawn
accurately

Work out the length of PQ .

[4 marks]

Answer _____ km



10

Mia wants to borrow £6000 and repay it, with interest, after two years.
She sees two offers for loans.

Offer 1
Compound interest
3% per year

Offer 2
Compound interest
First year 1%
Second year 5%

Mia says,

“I will pay back the same amount because the average of 1% and 5% is 3%”

Is she correct?

You **must** show your working.

[3 marks]

Turn over for the next question



11 Here are two sets of numbers, A and B.

Set A

200	160
104	100

Set B

270	400	483
300	x	

mean of Set A : mean of Set B = 3 : 8

Work out the value of x .

[4 marks]

Answer _____



12

A straight line

has gradient 4

and

passes through the point (5, 23)

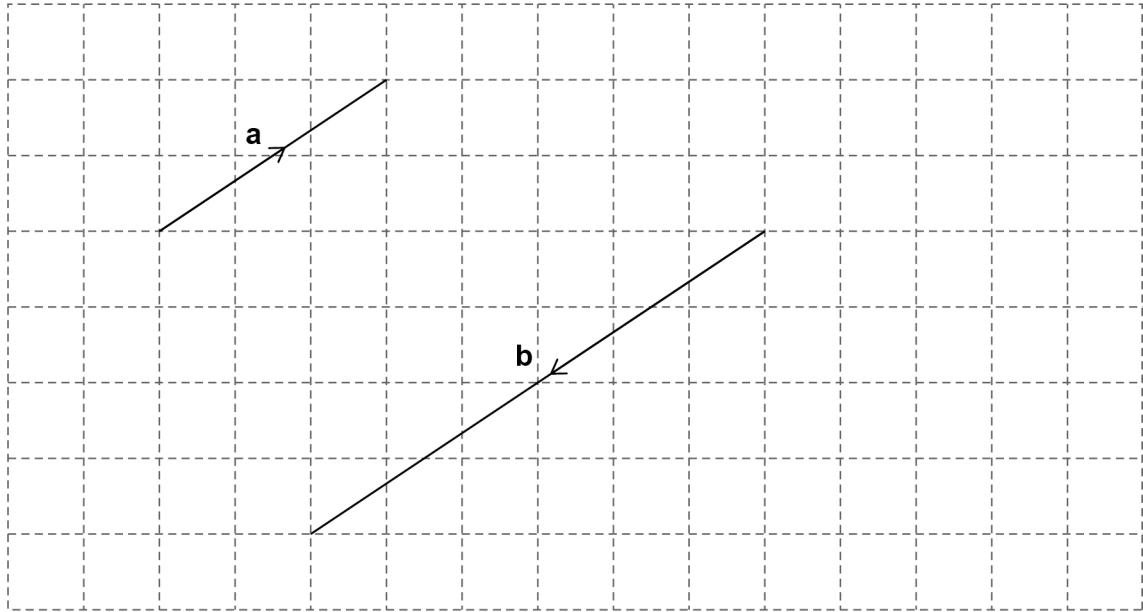
Work out the equation of the line.

Give your answer in the form $y = mx + c$ **[3 marks]**

Answer _____

Turn over for the next question

13 (a) Vectors **a** and **b** are drawn on a grid.



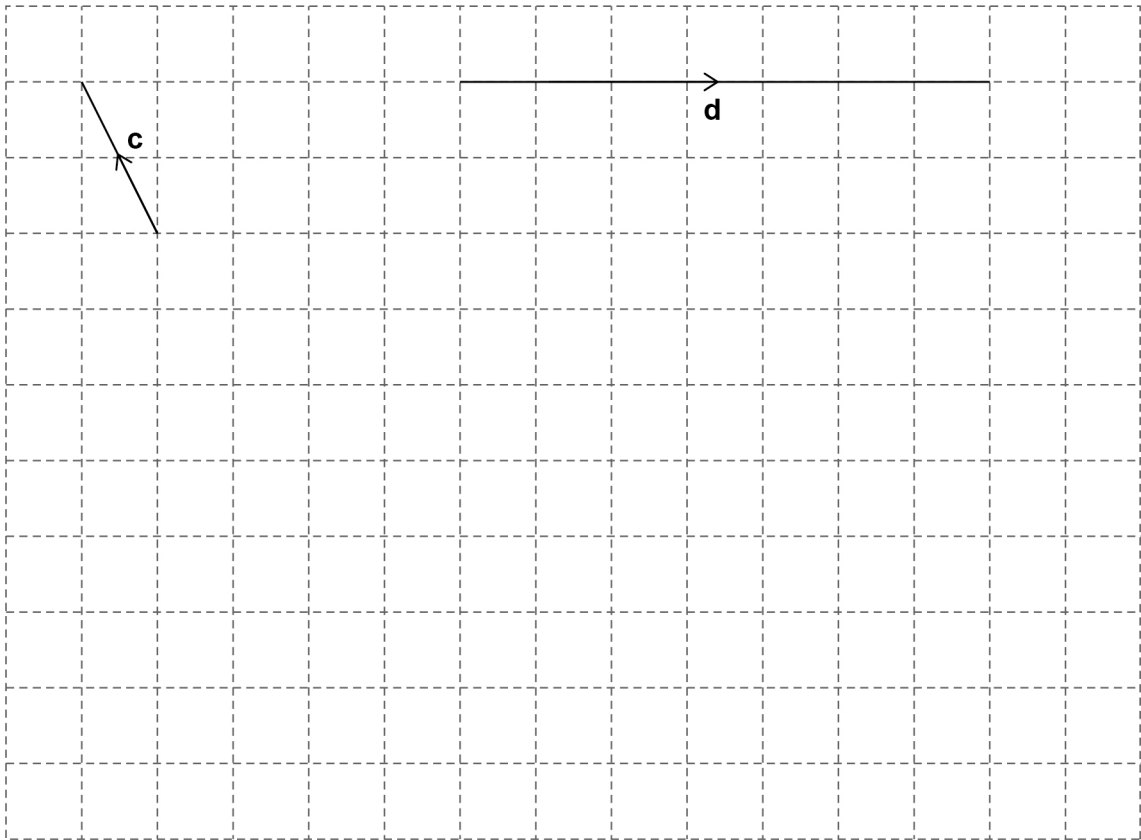
Write **b** in terms of **a**.

[1 mark]

b = _____



13 (b) Vectors **c** and **d** are drawn on a grid.



On the grid above, draw a vector representing $\mathbf{c} - \mathbf{d}$

[2 marks]

Turn over for the next question



- 14 For Class X, number of boys : number of girls = 7 : 8
For Class Y, number of boys : number of girls = 3 : 4

Which statement **must** be true?

Tick **one** box.

[1 mark]

Class X has more boys than class Y

Class X has twice as many girls as class Y

Class X has a greater proportion of boys than class Y

Class X has the same proportion of boys as class Y

- 15 Simplify fully $\frac{a^3b^2}{cd} \times \frac{c}{ab^5}$

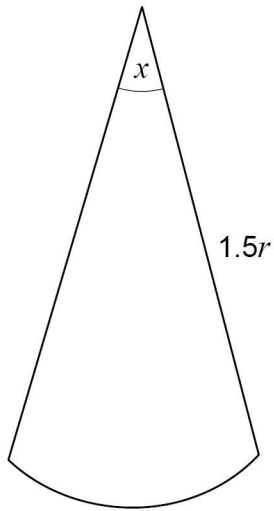
[3 marks]

Answer _____



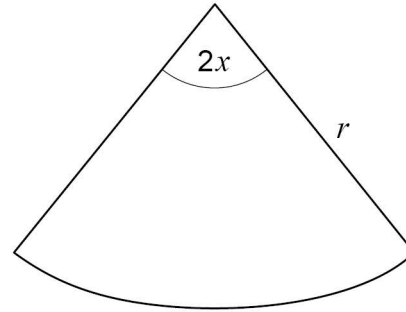
16 Here are two sectors from different circles.

Sector A



Sector B

Not drawn
accurately



Which sector has the bigger area?

Tick a box.

Sector A

Sector B

Show working to support your answer.

[2 marks]



17

A factory makes kettles.

Four samples of kettles are tested for faults.

Each sample has size 200

Here are the relative frequencies of faulty kettles in the samples.

Sample	P	Q	R	S
Relative frequency	0.03	0.035	0.015	0.01

Work out the range of the number of faulty kettles in the four samples.

[3 marks]

Answer _____



18 (a) Write $x(3x - 9) = 4$ in the form $ax^2 + bx + c = 0$ where a , b and c are integers.

[1 mark]

Answer _____

18 (b) Solve $x(3x - 9) = 4$

Give your answers to 2 decimal places.

[2 marks]

Answer _____

Turn over for the next question

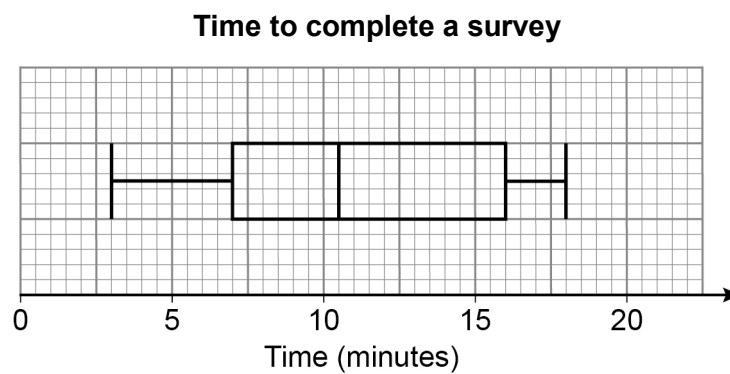


19

Here is some information about the times people took to complete a survey.

Fastest time	3 minutes
Slowest time	18 minutes
Median	11 minutes
Lower quartile	7 minutes
Interquartile range	8 minutes

Ben draws this box plot to show the information.



Make **two** criticisms of his box plot.

[2 marks]

Criticism 1 _____

Criticism 2 _____



20 d is directly proportional to the square of v .

$$d = 6 \text{ when } v = 20$$

20 (a) Work out an equation connecting d and v .

[3 marks]

Answer _____

20 (b) Work out the value of d when $v = 30$

[2 marks]

Answer _____

Turn over for the next question

7

Turn over ►



21 Hanif makes green paint by mixing blue paint and yellow paint in the ratio
blue : yellow = 7 : 3

He buys blue paint in 50-litre containers, each costing £225

He buys yellow paint in 20-litre containers, each costing £80

He wants to

sell the green paint in 5-litre tins

make 40% profit on each tin.

How much should he sell each tin for?

[5 marks]

Answer £ _____

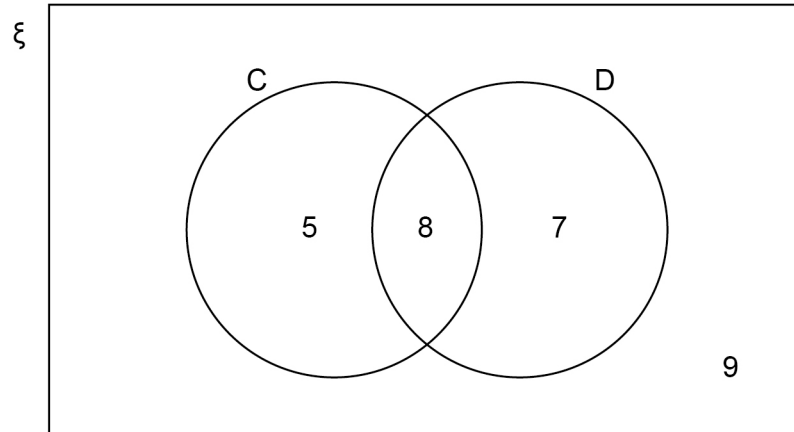


22

 $\xi = 29$ students in a class

C = students who own a cat

D = students who own a dog



22 (a) A student is chosen at random.

Circle the probability that the student owns a cat or a dog but not both.

[1 mark]

$\frac{12}{29}$

$\frac{13}{29}$

$\frac{15}{29}$

$\frac{20}{29}$

22 (b) A student who owns a dog is chosen at random.

Circle the probability that the student also owns a cat.

[1 mark]

$\frac{7}{15}$

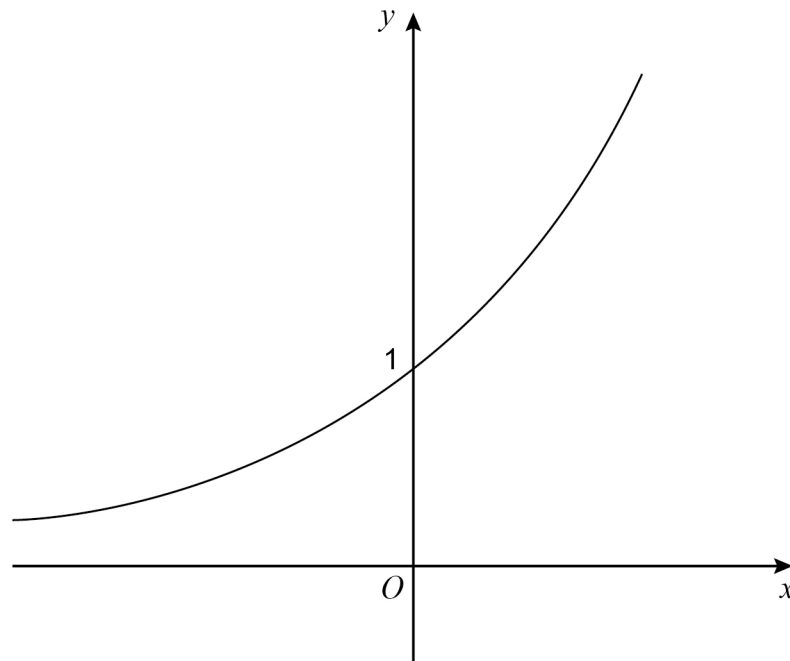
$\frac{8}{15}$

$\frac{7}{29}$

$\frac{8}{29}$

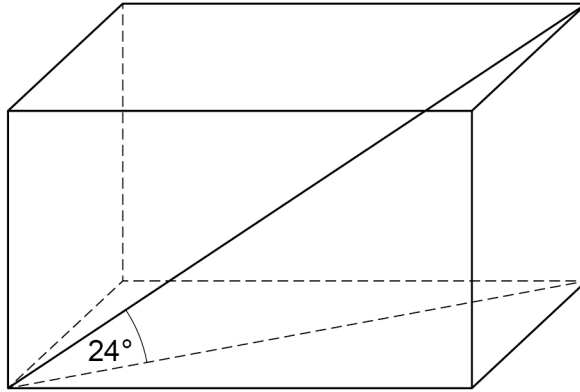


23

Here is a sketch of the curve $y = 2^x$ On the axes above, sketch the curve $y = 3^x$ **[2 marks]**

24

The length of a diagonal of a cuboid is 20 cm
The diagonal makes an angle of 24° with the base.
The area of the base is 150 cm^2



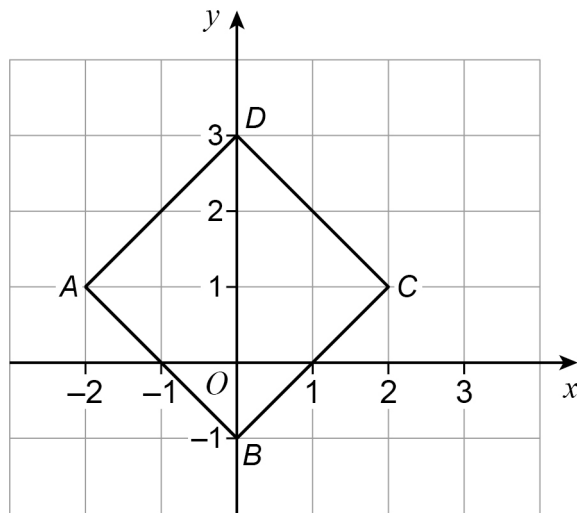
Work out the volume of the cuboid.

[3 marks]

Answer _____ cm^3



25

 $ABCD$ is a square. A is $(-2, 1)$ B is $(0, -1)$ C is $(2, 1)$ D is $(0, 3)$ 25 (a) A **single** transformation of $ABCD$ is such that B is mapped to D D is mapped to B A and C are invariant points.

Describe fully the transformation.

[2 marks]



25 (b) A different **single** transformation of $ABCD$ is such that

B is mapped to D

D is mapped to B

the only invariant point is $(0, 1)$

Describe fully the transformation.

[3 marks]

26 $g(x) = 16 - x$ $h(x) = x^3$

Solve $gh(x) = 24$

[3 marks]

$x =$ _____

Turn over for the next question



27

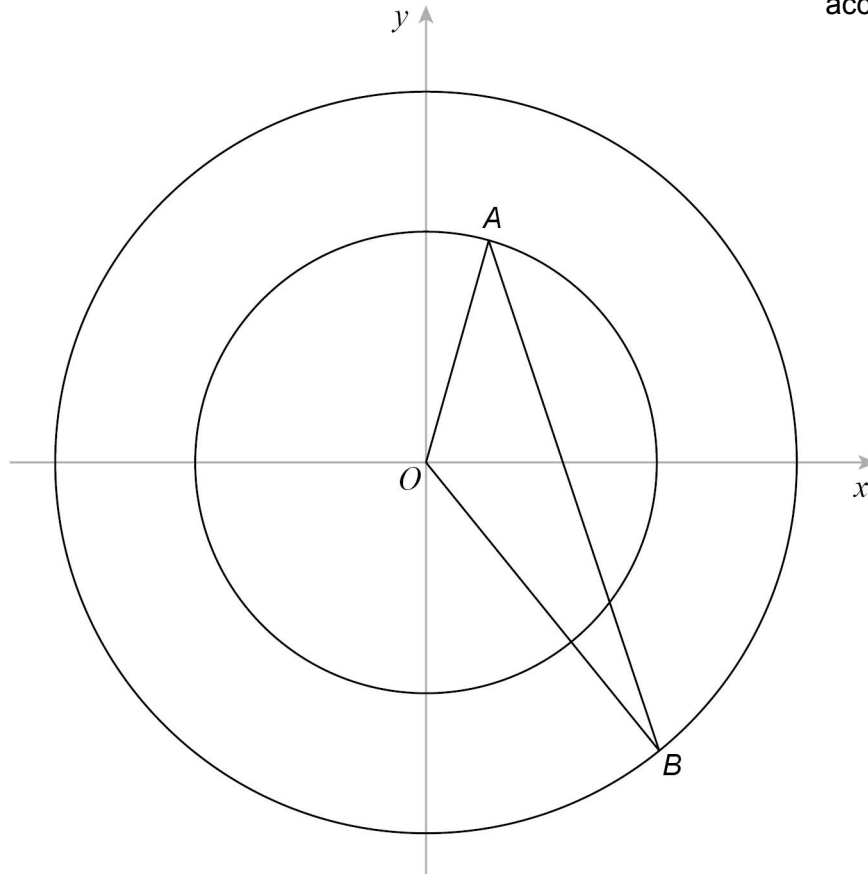
In this question, all lengths are in centimetres.

A is a point on a circle, centre O .

B is a point on a different circle, centre O .

$AB = 20$

Not drawn
accurately



The equation of the larger circle is $x^2 + y^2 = 144$

radius of smaller circle : radius of larger circle = 4 : 5



Work out the size of angle AOB .

[5 marks]

Answer _____ degrees

Turn over for the next question

5

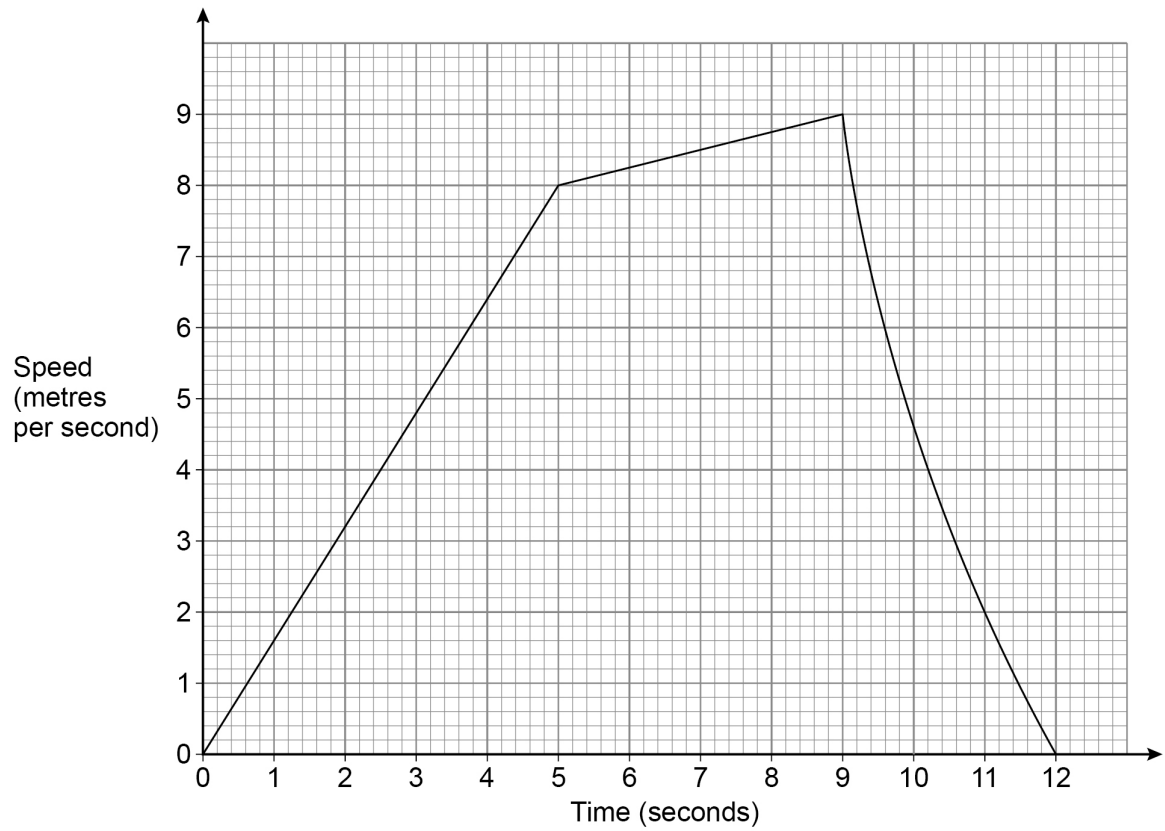
Turn over ►



28

Leo runs for 12 seconds.

The graph shows his speed.



28 (a) Show that the distance he runs is less than 67.5 metres.

[4 marks]



- 28 (b)** Work out his average acceleration for the first 9 seconds.
State the units of your answer.

[2 marks]

Answer _____

END OF QUESTIONS



There are no questions printed on this page

*Do not write
outside the
box*

**DO NOT WRITE ON THIS PAGE
ANSWER IN THE SPACES PROVIDED**

Copyright information

For confidentiality purposes, from the November 2015 examination series, acknowledgements of third-party copyright material are published in a separate booklet rather than including them on the examination paper or support materials. This booklet is published after each examination series and is available for free download from www.aqa.org.uk after the live examination series.

Permission to reproduce all copyright material has been applied for. In some cases, efforts to contact copyright-holders may have been unsuccessful and AQA will be happy to rectify any omissions of acknowledgements. If you have any queries please contact the Copyright Team, AQA, Stag Hill House, Guildford, GU2 7XJ.

Copyright © 2019 AQA and its licensors. All rights reserved.



2 8



1 9 6 G 8 3 0 0 / 3 H

IB/M/Jun19/8300/3H